

Name: _____ Period: _____ Date: _____

Patterns Exit Slip



Figure 1

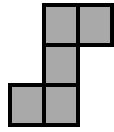


Figure 2

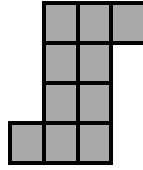


Figure 3

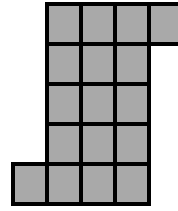


Figure 4

1. Explain in words what Figure 25 looks like.

2. How many tiles are there in Figure 25?

Name: _____ Period: _____ Date: _____

Patterns Exit Slip



Figure 1

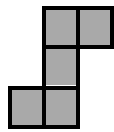


Figure 2

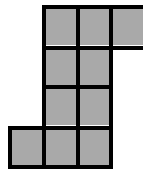


Figure 3

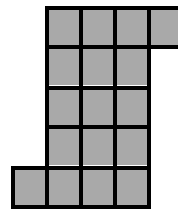


Figure 4

1. Explain in words what Figure 25 looks like.

2. How many tiles are there in Figure 25?